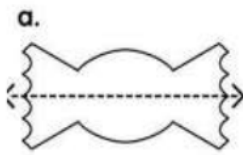


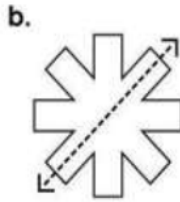
Name: \_\_\_\_\_

# Symmetry


Tell whether the dotted line on each shape represents a line of symmetry. Write yes or no.



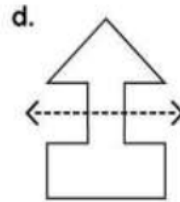
Yes



Yes

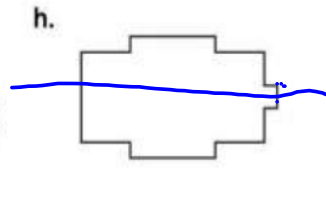
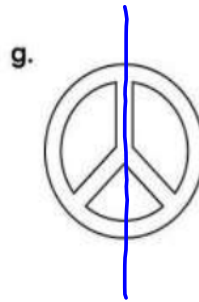
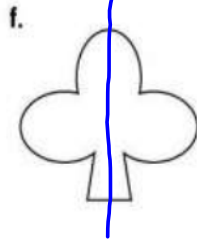
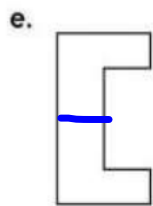


NO



NO

Draw a line of symmetry on each shape.



Draw the second half of each symmetrical shape.

